

Name : _____

Date : _____

Objective:

Students are able to identify the pattern rule for addition as well as subtraction

Can you tell what the hidden message is?



Help Mr.X to read the complete message by solving the number patterns below!

PATTERN IS A										1	2	3	4	2	1	OF
3	2	5	2	A	6	2	D	UNI	6							

Clue:

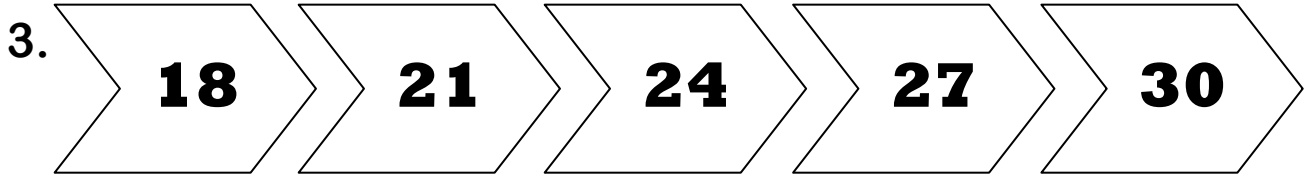
(+ 10)	(+ 5)	(+ 4)	(+ 3)	(+ 2)	(- 2)	(- 3)	(- 4)	(- 5)	(- 10)
S	M	T	R	I	F	P	C	E	L

1. 22 32 42 52 62


Pattern rule : _____

2. 36 31 26 21 16


Pattern rule : _____




Pattern rule : _____



Pattern rule : _____



Pattern rule : _____



Pattern rule : _____